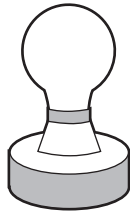

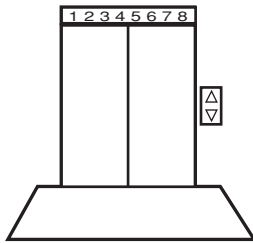
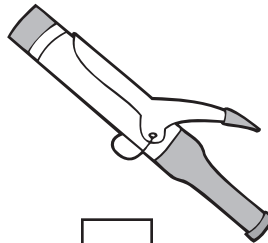
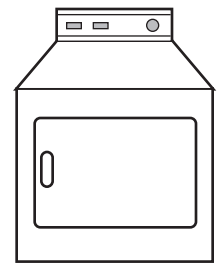


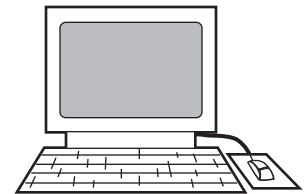
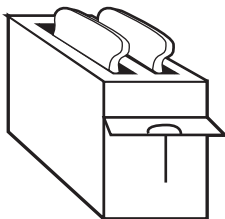

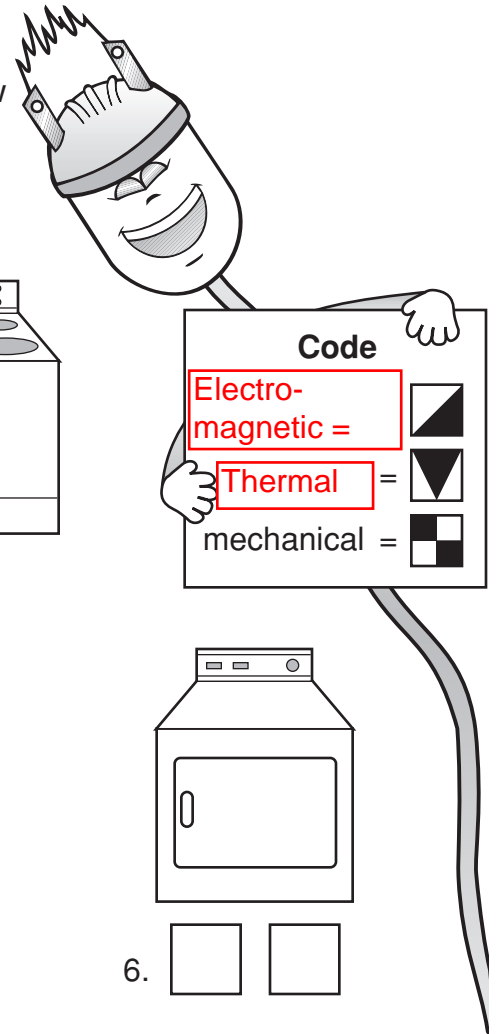


# Electricity at Work

Electricity can provide light, heat, or mechanical energy. Draw the symbol under each object to show which kind or kinds of energy it uses.

1. ☐2. ☐ ☐3. ☐4. ☐5. ☐6. ☐ ☐7. ☐8. ☐9. ☐10. ☐11. ☐12. ☐ ☐

## Code

Electro-magnetic =



Thermal =



mechanical =



**Bonus Box:** Name five additional objects in which electricity provides light, heat, or mechanical energy.





## Answer Key



Bonus Box: Answers will vary.

